

Name : _____

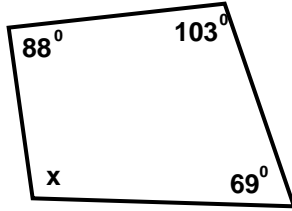
Score : _____

Teacher : _____

Date : _____

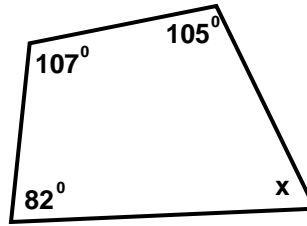
Find the measure of the missing angle.

1)



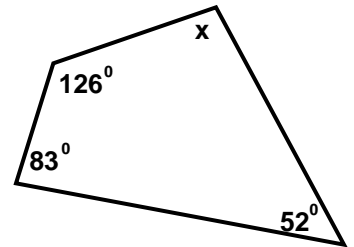
Solve for x _____

2)



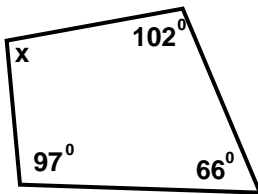
Solve for x _____

3)



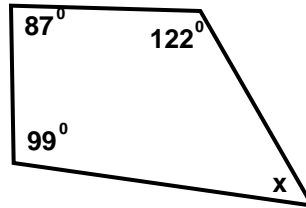
Solve for x _____

4)



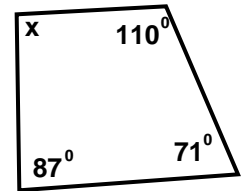
Solve for x _____

5)



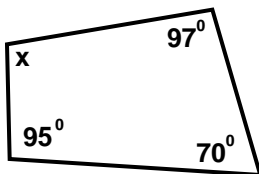
Solve for x _____

6)



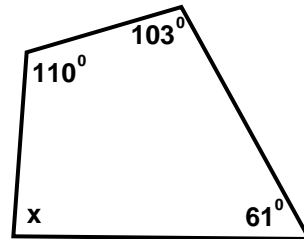
Solve for x _____

7)



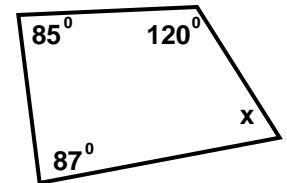
Solve for x _____

8)



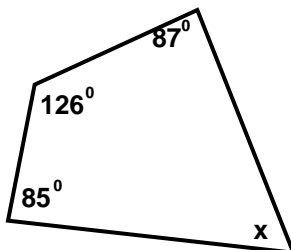
Solve for x _____

9)



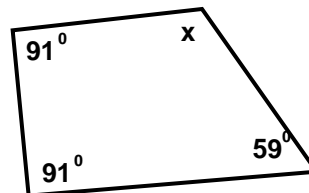
Solve for x _____

10)



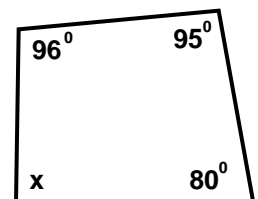
Solve for x _____

11)



Solve for x _____

12)



Solve for x _____



Name : _____

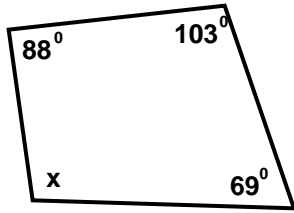
Score : _____

Teacher : _____

Date : _____

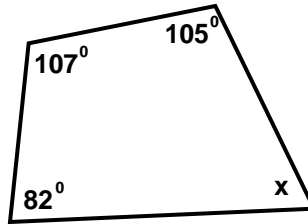
Find the measure of the missing angle.

1)



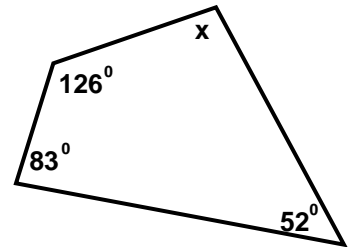
Solve for x 100°

2)



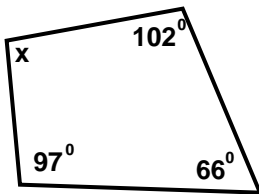
Solve for x 66°

3)



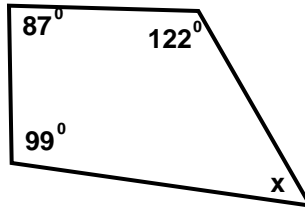
Solve for x 99°

4)



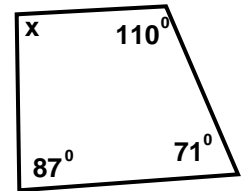
Solve for x 95°

5)



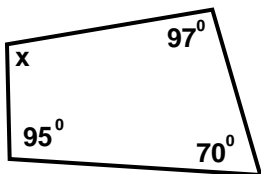
Solve for x 52°

6)



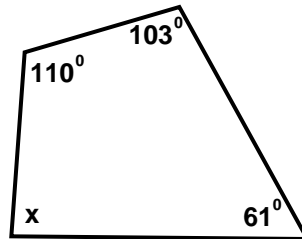
Solve for x 92°

7)



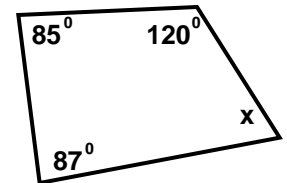
Solve for x 98°

8)



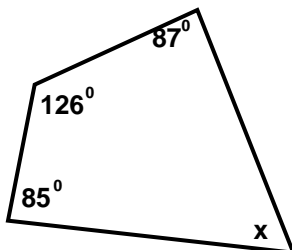
Solve for x 86°

9)



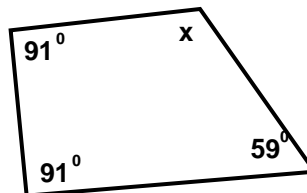
Solve for x 68°

10)



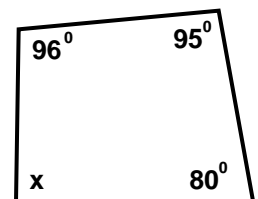
Solve for x 62°

11)



Solve for x 119°

12)



Solve for x 89°

